

FOCUS 5 TASKS - Set 1

Each of the 36 topics is covered once within the 6 sheets

Sheet 1A

Two-way tables	Q1
Use of a calculator	Q2
Quadratic and cubic graphs	Q3
Proportion	Q4
Venn Diagrams	Q5
Compound Measures	Q6

Sheet 1B

Simultaneous equations	Q1
Trigonometry - finding an angle	Q2
Estimation	Q3
Percentages	Q4
Equivalence	Q5
Reflections	Q6

Sheet 1C

Exchange rates	Q1
Product of prime factors	Q2
Probability from a Table	Q3
Averages from Grouped Data	Q4
Translations	Q5
Scatter graphs	Q6

Sheet 1D

Indices	Q1
Trigonometry - finding sides	Q2
Volume	Q3
Standard Form	Q4
Alternate and corresponding angles	Q5
Pythagoras /Trigonometry	Q6

Sheet 1E

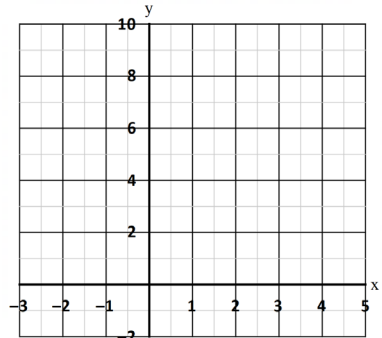
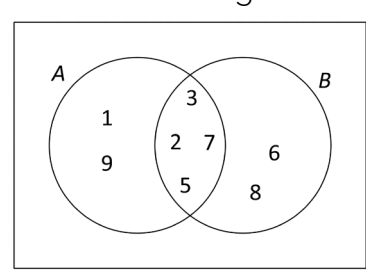
Circles	Q1
Plans and elevations	Q2
Expand and Simplify	Q3
Sequences - nth term	Q4
Pythagoras	Q5
Rotations	Q6

Sheet 1F

Averages from a Table	Q1
Vectors	Q2
Enlargements	Q3
Inequalities	Q4
Straight Line Graphs	Q5
Expanding Double Brackets	Q6

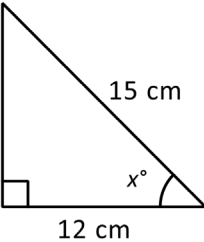



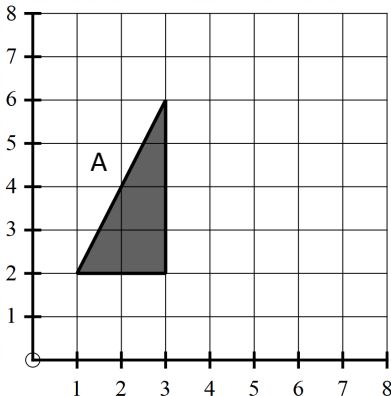
SKILLS CHECK

Work out $517 + 358$	Work out 24×32	Work out $\frac{3}{4} + \frac{1}{5}$	Divide £350 in the ratio 3 : 11
Work out $852 - 664$	Work out $884 \div 26$	What is 85% of £480?	Solve $5x - 2 = 2x + 19$

<p>QUESTION 1</p> <p>Hazel asked 100 adults about types of films they enjoyed. Complete the 2 way table</p> <table border="1" style="margin-left: auto; margin-right: auto;"> <tr> <td>Total</td> <td>47</td> <td></td> <td></td> </tr> <tr> <td>Thriller</td> <td></td> <td></td> <td>29</td> </tr> <tr> <td>Action</td> <td>19</td> <td></td> <td>35</td> </tr> <tr> <td>Comedy</td> <td></td> <td>25</td> <td></td> </tr> <tr> <td>Men</td> <td>Women</td> <td>Total</td> <td></td> </tr> </table>	Total	47			Thriller			29	Action	19		35	Comedy		25		Men	Women	Total		<p>QUESTION 2</p> <p>Work out</p> <p>a) 2.2^5 (answer correct to 2 d.p.)</p> <p>b) 67% of £45.00</p>	<p>QUESTION 3</p> <p>Complete the table of values for $y = x^2 - 1$ and plot the graph</p> <table border="1" style="margin-left: auto; margin-right: auto;"> <tr> <td>x</td> <td>-2</td> <td>-1</td> <td>0</td> <td>1</td> <td>2</td> <td>3</td> </tr> <tr> <td>y</td> <td></td> <td></td> <td>-1</td> <td></td> <td></td> <td></td> </tr> </table> 	x	-2	-1	0	1	2	3	y			-1			
Total	47																																			
Thriller			29																																	
Action	19		35																																	
Comedy		25																																		
Men	Women	Total																																		
x	-2	-1	0	1	2	3																														
y			-1																																	
<p>QUESTION 4</p> <p>A recipe for 6 people uses 250g of flour. How much flour will be needed to make the recipe for 15 people?</p>	<p>QUESTION 5</p> <p>Here is a Venn diagram</p>  <p>Write down the numbers that are in set</p> <p>$A \cup B$</p> <p>$A \cap B$</p>	<p>QUESTION 6</p> <p>A car travels for 2 hours 15 minutes at an average speed of 64 mph. Calculate the distance travelled.</p>																																		

SKILLS CHECK

Work out $658 + 184$	Work out 35×34	Work out $\frac{3}{8} - \frac{1}{5}$	Divide £180 in the ratio 7 : 5
Work out $706 - 325$	Work out $1404 \div 26$	What is 15% of £54?	Solve $6(x + 1) = 3$

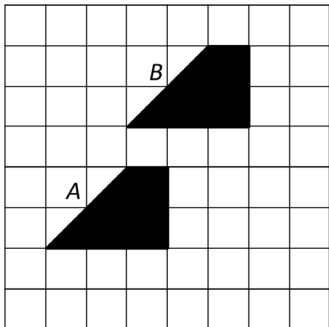
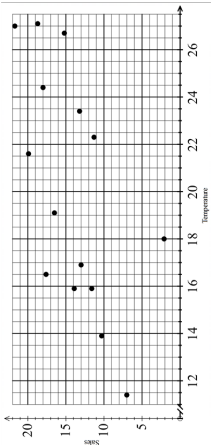
<p>QUESTION 1</p> <p>Solve the simultaneous equations</p> $2x + y = 3 \quad x + y = 1$	<p>QUESTION 2</p> <p>Calculate x Give your answer to the nearest degree</p> 	<p>QUESTION 3</p> <p>Estimate</p> $\frac{453 + 254}{5.2 \times 3.8}$ 
<p>QUESTION 4</p> <p>Calculate 15% of £420</p> <p>Increase £320 by 10%</p> 	<p>QUESTION 5</p> <p>Express $\frac{3}{20}$ as a percentage</p> <p>The ratio of blue counters to red counters in a bag is 3 : 5. What fraction of the counters are red?</p> 	<p>QUESTION 6</p> <p>Reflect triangle A in the line $x = 4$. Label your triangle B</p> 

FOCUS 5 TASK 1C

NAME _____

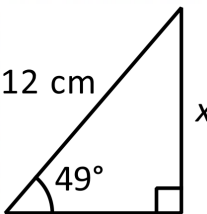
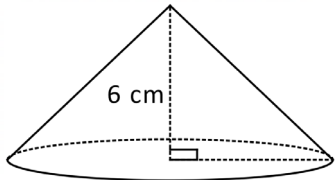
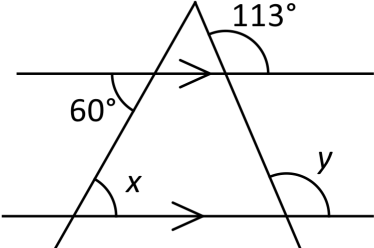
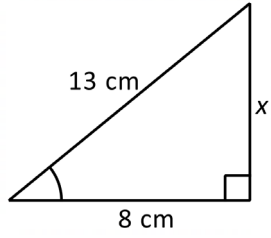
SKILLS CHECK

Work out $78 + 478$	Work out 3.5×14	Work out $\frac{3}{8} \times \frac{1}{6}$	Divide £168 in the ratio 2 : 5
Work out $824 - 698$	Work out $1134 \div 18$	What is 2% of £540?	Solve $5x - 3 = 15 - x$

<p>QUESTION 1</p> <p>If the exchange rate is $\pounds 1 = \\$1.25$ Work out the missing values</p> <p>a) $\pounds 500 = \\$\dots$</p> <p>b) $\\$30.50 = \pounds \dots$</p>	<p>QUESTION 2</p> <p>Express 120 as the product of prime factors</p>	<p>QUESTION 3</p> <p>The table shows the probability of picking different colour pins from a box</p> <table border="1"> <tr> <th>Colour</th> <th>Red</th> <th>Green</th> <th>Blue</th> <th>Pink</th> </tr> <tr> <td>Probability</td> <td>0.2</td> <td></td> <td>0.3</td> <td>0.1</td> </tr> </table> <p>Calculate the probability of picking Green</p> <p>Calculate the probability of picking Red or Pink</p>	Colour	Red	Green	Blue	Pink	Probability	0.2		0.3	0.1														
Colour	Red	Green	Blue	Pink																						
Probability	0.2		0.3	0.1																						
<p>QUESTION 4</p> <p>Calculate an estimate of the mean height.</p> <table border="1"> <tr> <th>Height</th> <th>f</th> <th></th> <th></th> </tr> <tr> <td>$0 \leq h < 5$</td> <td>21</td> <td></td> <td></td> </tr> <tr> <td>$5 \leq h < 10$</td> <td>5</td> <td></td> <td></td> </tr> <tr> <td>$10 \leq h < 15$</td> <td>9</td> <td></td> <td></td> </tr> <tr> <td>$15 \leq h < 20$</td> <td>3</td> <td></td> <td></td> </tr> <tr> <td>$20 \leq h < 25$</td> <td>2</td> <td></td> <td></td> </tr> </table>	Height	f			$0 \leq h < 5$	21			$5 \leq h < 10$	5			$10 \leq h < 15$	9			$15 \leq h < 20$	3			$20 \leq h < 25$	2			<p>QUESTION 5</p> <p>Describe the single transformation that maps shape A onto shape B</p> 	<p>QUESTION 6</p> <p>The average temperature and number of ice creams sold is recorded.</p>  <p>a) Circle the result which is an outlier.</p> <p>b) Plot a line of best fit and use this to estimate the sales for a temperature of 20</p>
Height	f																									
$0 \leq h < 5$	21																									
$5 \leq h < 10$	5																									
$10 \leq h < 15$	9																									
$15 \leq h < 20$	3																									
$20 \leq h < 25$	2																									

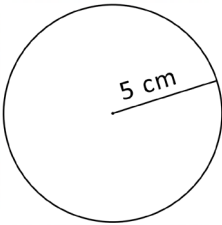
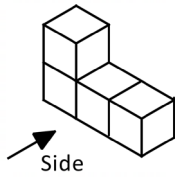

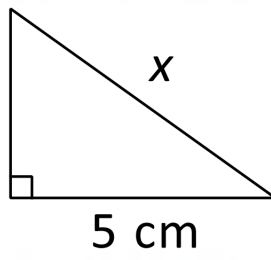
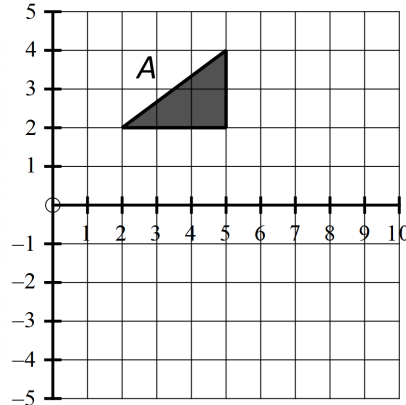
SKILLS CHECK

Work out $685 + 197$	Work out 2.8×1.2	Work out $\frac{3}{5} \div \frac{2}{15}$	Divide £231 the ratio 4 : 7
Work out $905 - 469$	Work out $901 \div 17$	What is 2.5% of £80?	Solve $\frac{x-4}{5} = 2$

QUESTION 1	QUESTION 2	QUESTION 3
Simplify $2a^3 \times 3a$ Write 3^{-2} as a fraction	Calculate x Give your answer correct to 1 d.p. 	Calculate the volume of the cone using $V = \frac{1}{3}\pi r^2 h$  Radius = 7 cm (Answer correct to 1 d.p.)
QUESTION 4	QUESTION 5	QUESTION 6
Express in standard form 102000 0.000001	Calculate the value of x and y 	Calculate x Give your answer correct to 1 d.p. 

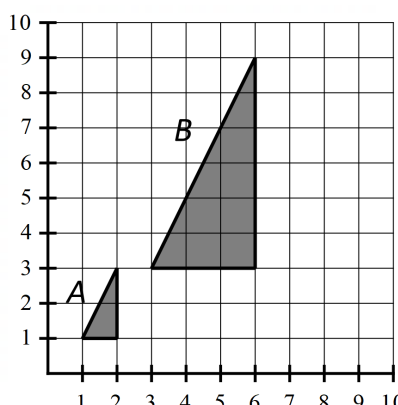
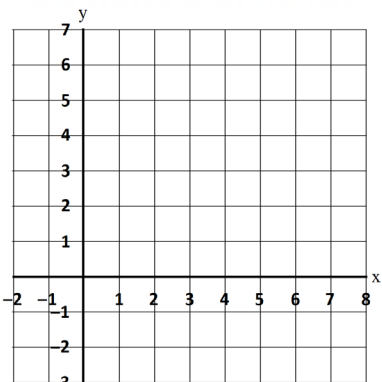
SKILLS CHECK

Work out $872 + 48$	Work out 36×3.6	Work out $\frac{3}{4} + \frac{1}{5}$	Divide £350 in the ratio 3 : 11
Work out $602 - 487$	Work out $1248 \div 26$	What is 95% of £640?	Solve $2x = 6 - x$

<p>QUESTION 1</p> <p>Calculate the area Give your answer correct to 1 d.p.</p> 	<p>QUESTION 2</p> <p>Draw the plan and side elevation</p>  	<p>QUESTION 3</p> <p>Expand and simplify $3(2x + 1) + 2(x - 2)$</p>
<p>QUESTION 4</p> <p>Find the nth term of 0, 4, 8, 12, 16.....</p> <p>How many terms are less than 100?</p>	<p>QUESTION 5</p> <p>Calculate x Give your answer correct to 1 d.p.</p> 	<p>QUESTION 6</p> <p>Rotate triangle A, 90° clockwise about centre (0,0). Label your triangle B.</p> 

SKILLS CHECK

Work out $655 + 247$	Work out 24×32	Work out $\frac{3}{4} - \frac{1}{5}$	Divide £350 in the ratio 3 : 2
Work out $805 - 694$	Work out $1710 \div 45$	What is 55% of £560?	Solve $\frac{5x}{8} - 1 = 4$

<p>QUESTION 1</p> <p>Calculate the mean</p> <table border="1"> <thead> <tr> <th>x</th> <th>f</th> </tr> </thead> <tbody> <tr> <td>1</td> <td>3</td> </tr> <tr> <td>2</td> <td>10</td> </tr> <tr> <td>3</td> <td>12</td> </tr> <tr> <td>4</td> <td>10</td> </tr> <tr> <td>5</td> <td>5</td> </tr> </tbody> </table> <p>What is the modal value?</p>	x	f	1	3	2	10	3	12	4	10	5	5	<p>QUESTION 2</p> <p>$\mathbf{a} = \begin{pmatrix} 3 \\ -4 \end{pmatrix}$ and $\mathbf{b} = \begin{pmatrix} 2 \\ 5 \end{pmatrix}$</p> <p>Work out as column vectors</p> <p>a) $\mathbf{a} + \mathbf{b}$</p> <p>b) $3\mathbf{a} - \mathbf{b}$</p>	<p>QUESTION 3</p> <p>Describe fully the transformation that maps shape A onto B</p> 		
x	f															
1	3															
2	10															
3	12															
4	10															
5	5															
<p>QUESTION 4</p> <p>Write down the largest integer which satisfies the inequality $6x - 5 < 13$</p>	<p>QUESTION 5</p> <p>Complete the table of values for $y = 2x + 1$ and plot the graph</p> <table border="1"> <tbody> <tr> <td>x</td> <td>-2</td> <td>-1</td> <td>0</td> <td>1</td> <td>2</td> <td>3</td> </tr> <tr> <td>y</td> <td></td> <td>-1</td> <td></td> <td></td> <td></td> <td></td> </tr> </tbody> </table> 	x	-2	-1	0	1	2	3	y		-1					<p>QUESTION 6</p> <p>Expand and simplify $(x + 3)(x + 5)$</p>
x	-2	-1	0	1	2	3										
y		-1														